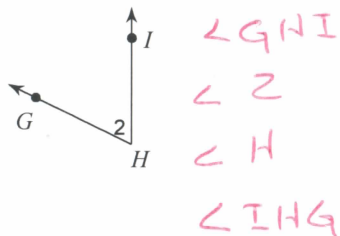


Unit 2 worksheet 1 (classifying and naming angles)

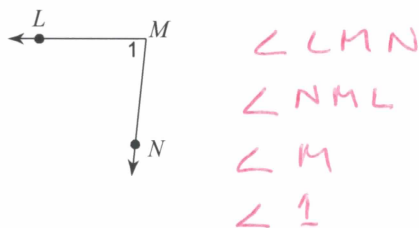
Date _____ Period _____

Name each angle in three ways.

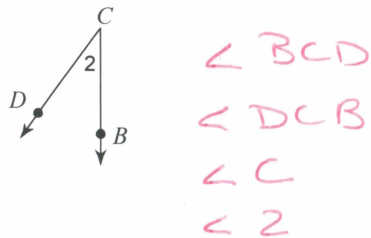
1)



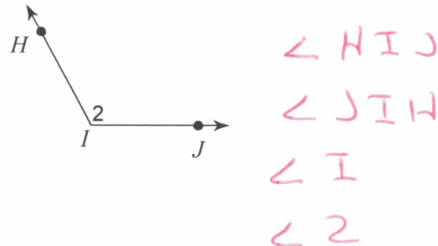
2)



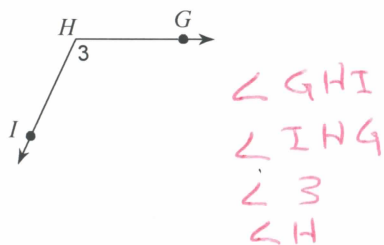
3)



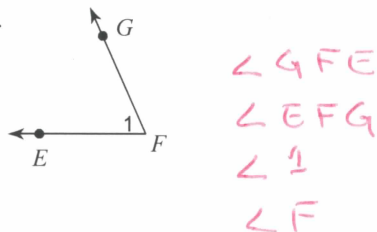
4)



5)



6)



Classify each angle as acute, obtuse, right, or straight.

7)



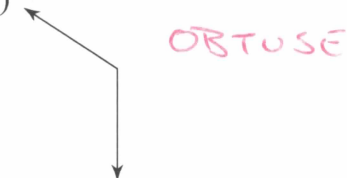
8)



9)



10)

11) 72° ACUTE12) 109° OBTUSE13) 180° STRAIGHT14) 90° RIGHT